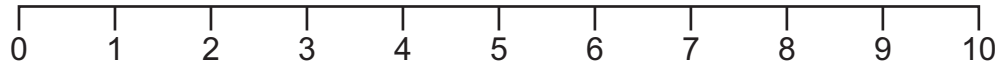


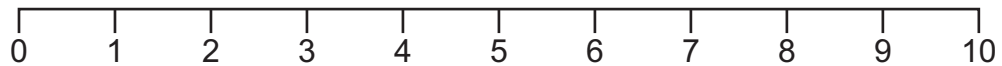
# Number Line Hopping

NAME \_\_\_\_\_

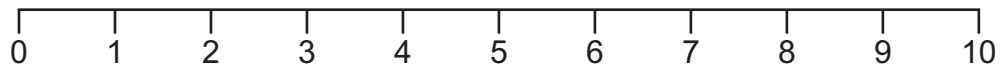
Use the number lines to find differences. Write a subtraction sentence for each.



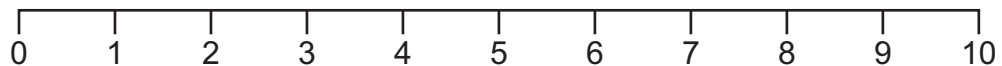
$$\square - \square = \square$$



$$\square - \square = \square$$



$$\square - \square = \square$$



$$\square - \square = \square$$